


Math avec la calculatrice



Note les calculs que tu as fait avec la calculatrice

$$\square + \square = \square$$

$$\square + \square = \square$$

$$\square + \square = \square$$


$$\square + \square = \square$$

$$\square + \square = \square$$

$$\square + \square = \square$$

$$\square + \square = \square$$

Math avec la calculatrice



Note les réponses données
par la calculatrice

$$\boxed{2} + \boxed{3} = \boxed{}$$

$$\boxed{7} + \boxed{1} = \boxed{}$$

$$\boxed{4} + \boxed{6} = \boxed{}$$

$$\boxed{5} + \boxed{5} = \boxed{}$$


$$\boxed{1} + \boxed{8} = \boxed{}$$

$$\boxed{4} + \boxed{4} = \boxed{}$$

$$\boxed{6} + \boxed{3} = \boxed{}$$

3

Math avec la calculatrice



Ecris les calculs que tu as trouvés

$$\square + \square = 2$$

$$\square + \square = 2$$

$$\square + \square = 2$$

$$\square + \square = 3$$


$$\square + \square = 3$$

$$\square + \square = 3$$

$$\square + \square = 3$$

4

Math avec la calculatrice




Ecris les calculs que tu as trouvés

<input type="text"/>	+	<input type="text"/>	=	<input type="text" value="4"/>
<input type="text"/>	+	<input type="text"/>	=	<input type="text" value="4"/>
<input type="text"/>	+	<input type="text"/>	=	<input type="text" value="4"/>
<input type="text"/>	+	<input type="text"/>	=	<input type="text" value="4"/>
<input type="text"/>	+	<input type="text"/>	=	<input type="text" value="4"/>

9

Math avec la calculatrice



Ecris les calculs que tu as trouvés

$$\square + \square = 9$$

$$\square + \square = 9$$

$$\square + \square = 9$$

$$\square + \square = 9$$


$$\square + \square = 9$$

$$\square + \square = 9$$

$$\square + \square = 9$$

7

Math avec la calculatrice



Ecris les calculs que tu as trouvés

$$\square + \square = 7$$

$$\square + \square = 7$$

$$\square + \square = 7$$

$$\square + \square = 7$$


$$\square + \square = 7$$

$$\square + \square = 7$$

$$\square + \square = 7$$

10

Math avec la calculatrice



Ecris les calculs que tu as trouvés

$$\square + \square = 10$$

$$\square + \square = 10$$

$$\square + \square = 10$$

$$\square + \square = 10$$

$$\square + \square = 10$$

$$\square + \square = 10$$

$$\square + \square = 10$$